

Schriftliche Addition
Addiere schriftlich. Aus den Kennbuchstaben der richtigen Lösungen ergibt sich ein Lösungswort.

<p>A</p> $\begin{array}{r} 6549 \\ + 8173 \\ + 3622 \\ \hline \end{array}$ <p>17344 (S) 18344 (R) 19344 (T)</p>	<p>B</p> $\begin{array}{r} 1386 \\ + 4791 \\ + 2098 \\ \hline \end{array}$ <p>8275 (A) 9175 (P) 8375 (C)</p>	<p>C</p> $\begin{array}{r} 897 \\ + 7415 \\ + 4501 \\ \hline \end{array}$ <p>11813 (I) 12713 (H) 12813 (D)</p>
<p>D</p> $\begin{array}{r} 6432 \\ + 7607 \\ + 4495 \\ \hline \end{array}$ <p>17534 (L) 18434 (E) 18534 (A)</p>	<p>E</p> $\begin{array}{r} 1179 \\ + 6638 \\ + 7763 \\ \hline \end{array}$ <p>15580 (R) 16580 (L) 15570 (S)</p>	<p>Lösungswort:</p> <p>A B C D E</p> <p><input type="checkbox"/> <input type="checkbox"/> <input type="checkbox"/> <input type="checkbox"/> <input type="checkbox"/></p>

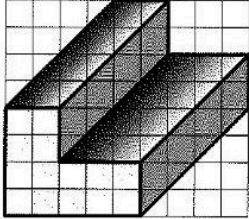
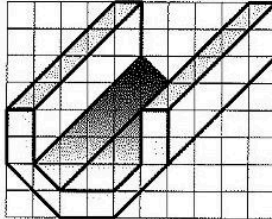
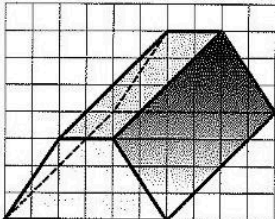



Schriftliche Subtraktion
Subtrahiere schriftlich. Aus den Kennbuchstaben der richtigen Lösungen ergibt sich ein Lösungswort.

<p>A</p> $\begin{array}{r} 6230 \\ - 953 \\ - 1754 \\ \hline \end{array}$ <p><input type="radio"/> 3523 (S) <input type="radio"/> 3623 (K) <input type="radio"/> 3723 (O)</p>	<p>B</p> $\begin{array}{r} 7887 \\ - 2697 \\ - 1632 \\ \hline \end{array}$ <p><input type="radio"/> 3558 (E) <input type="radio"/> 3658 (K) <input type="radio"/> 3668 (O)</p>	<p>C</p> $\begin{array}{r} 9186 \\ - 1068 \\ - 3695 \\ \hline \end{array}$ <p><input type="radio"/> 4323 (A) <input type="radio"/> 4423 (I) <input type="radio"/> 4523 (L)</p>	<p>D</p> $\begin{array}{r} 9519 \\ - 1943 \\ - 3692 \\ \hline \end{array}$ <p><input type="radio"/> 3874 (E) <input type="radio"/> 3984 (K) <input type="radio"/> 3884 (D)</p>	<p>E</p> $\begin{array}{r} 7639 \\ - 3140 \\ - 1756 \\ \hline \end{array}$ <p><input type="radio"/> 2733 (A) <input type="radio"/> 2843 (M) <input type="radio"/> 2743 (E)</p>
<p>Lösungswort: A B C D E</p> <p><input type="radio"/> <input type="radio"/> <input type="radio"/> <input type="radio"/> <input type="radio"/></p>				

Welche Zahl liegt genau in der Mitte?
Trage die Zahlen, die genau in der Mitte zwischen den beiden angegebenen Zahlen stehen, in die grauen Kästchen ein.

<p>A</p> <p>1482 1534</p>	<p>B</p> <p>1732 1796</p>	<p>C</p> <p>1211 1253</p>	<p>D</p> <p>1120 1184</p>
---------------------------------------	---------------------------------------	---------------------------------------	---------------------------------------

Schrägbilder von Körpern
Zeichne die Körper nach.

<p>A</p> 	<p>B</p> 	<p>C</p> 
<p>A</p> 	<p>B</p> 	<p>C</p> 

Kilometer (km), Meter (m), Dezimeter (dm), Zentimeter (cm) und Millimeter (mm)
Wandle in die angegebene Einheit um.

<p>A</p> <p>1,06 km = <input type="text"/> m</p> <p>5500 dm = <input type="text"/> km</p> <p>900 mm = <input type="text"/> dm</p>	<p>B</p> <p>7,2 m = <input type="text"/> dm</p> <p>80 m = <input type="text"/> km</p> <p>0,8 dm = <input type="text"/> mm</p>	<p>C</p> <p>45,2 m = <input type="text"/> dm</p> <p>3,08 dm = <input type="text"/> mm</p> <p>0,008 km = <input type="text"/> dm</p>
--	--	--

