
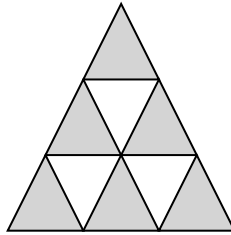
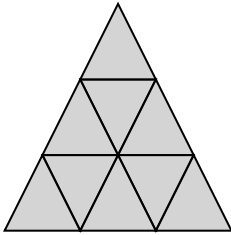


- ① Notiere zu den Figuren Brüche als „unechte Brüche“ und „gemischte Schreibweisen“.

a) _____


b) _____



- ② Zeichne zu den folgenden Brüchen passende Figuren.

a) $2\frac{3}{5}$

b) $\frac{11}{7}$




- ③ Wandle in einen unechten Bruch um.

a) $3\frac{1}{2}$

b) $7\frac{3}{4}$

c) $6\frac{5}{7}$

d) $7\frac{6}{10}$



- ④ Wandle in eine gemischte Schreibweise um.

a) $\frac{11}{2}$

b) $\frac{13}{4}$

c) $\frac{65}{7}$

d) $\frac{99}{10}$

