

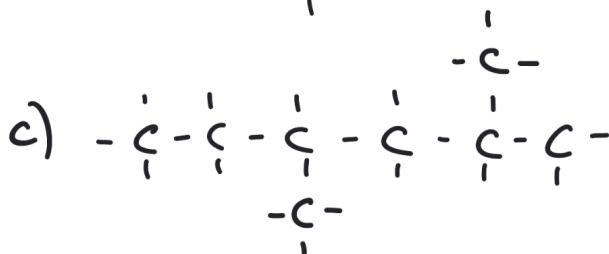
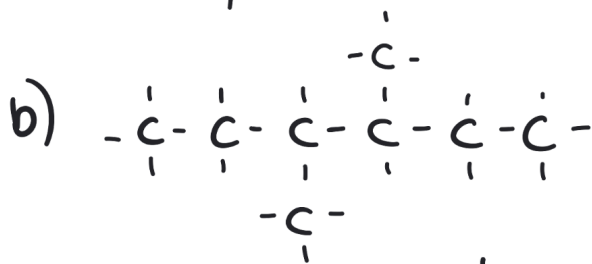
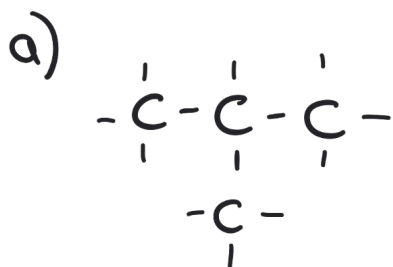
① **Zeichne** folgende Moleküle.

/ 6½

- a) 2,3-Dimethylbutan
- b) 4-Ethyl-2,4-dimethyloctan
- c) 3-Ethyl-2-methylpentan

② **Benenne** folgende Moleküle.

/ 5½



a)

b)

c)

Punkte:

/ 12

Note

Unterschrift