

① **Zeichne** folgende Moleküle.

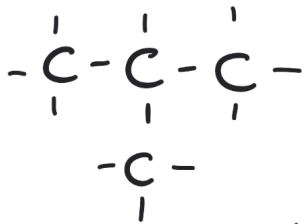
/ 6½

- a) 2,3-Dimethylbutan
 b) 4-Ethyl-2,4-dimethyloctan
 c) 3-Ethyl-2-methylpentan

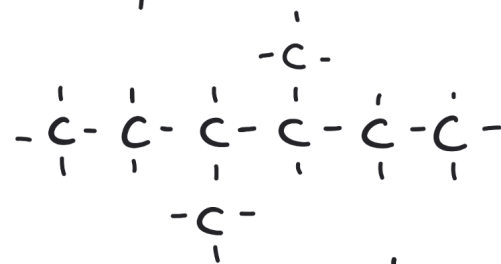
② **Benenne** folgende Moleküle.

/ 5½

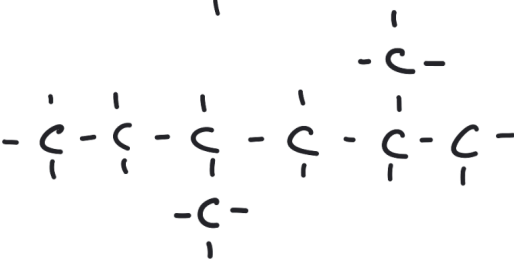
a)



b)



c)



a)

b)

c)

Punkte:	/ 12
---------	------

Note

Unterschrift
