



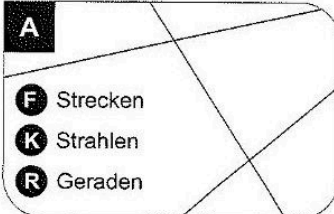
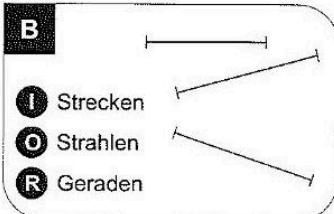
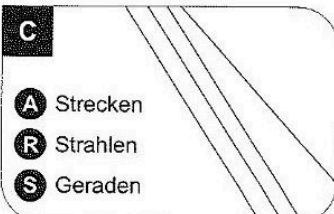
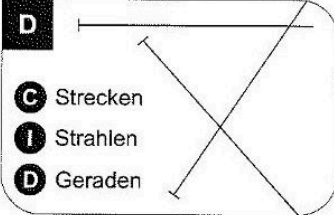
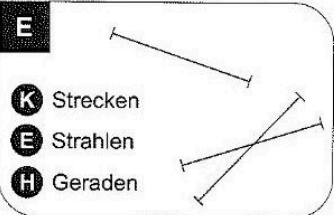
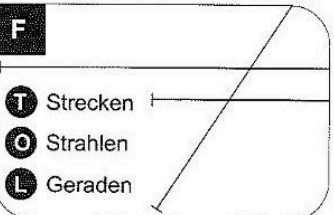


**Station**

**Strecke, Strahl oder Gerade?**


Kreuze an, ob es sich um Strecken, Strahlen oder Geraden handelt. Die Buchstaben bei den richtigen Lösungen ergeben ein Lösungswort.

<div style="border: 1px solid black; padding: 5px;"> <p><b>A</b></p>  <p><b>F</b> Strecken <b>K</b> Strahlen <b>R</b> Geraden</p> </div>	<div style="border: 1px solid black; padding: 5px;"> <p><b>B</b></p>  <p><b>I</b> Strecken <b>O</b> Strahlen <b>R</b> Geraden</p> </div>	<div style="border: 1px solid black; padding: 5px;"> <p><b>C</b></p>  <p><b>A</b> Strecken <b>R</b> Strahlen <b>S</b> Geraden</p> </div>
<div style="border: 1px solid black; padding: 5px;"> <p><b>D</b></p>  <p><b>C</b> Strecken <b>I</b> Strahlen <b>D</b> Geraden</p> </div>	<div style="border: 1px solid black; padding: 5px;"> <p><b>E</b></p>  <p><b>K</b> Strecken <b>E</b> Strahlen <b>H</b> Geraden</p> </div>	<div style="border: 1px solid black; padding: 5px;"> <p><b>F</b></p>  <p><b>T</b> Strecken <b>O</b> Strahlen <b>L</b> Geraden</p> </div>




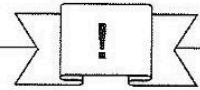
<b>A</b>	<b>B</b>	<b>C</b>	<b>D</b>	<b>E</b>	<b>F</b>
----------	----------	----------	----------	----------	----------

Lösungswort:

--	--	--	--	--	--

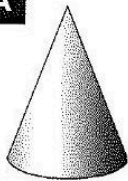

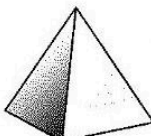
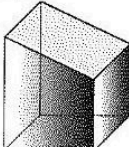
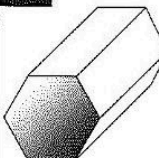
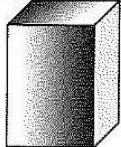


**Station**

**Ecken geometrischer Körper**

Bestimme die Anzahl der Ecken der abgebildeten Körper. Die Buchstaben der richtigen Lösungen ergeben das Lösungswort.

<div style="border: 1px solid black; padding: 5px;"> <p><b>A</b></p>  <p><b>L</b> 2 <b>B</b> 0 <b>P</b> 1</p> </div>	<div style="border: 1px solid black; padding: 5px;"> <p><b>B</b></p>  <p><b>O</b> 1 <b>A</b> 0 <b>R</b> 2</p> </div>	<div style="border: 1px solid black; padding: 5px;"> <p><b>C</b></p>  <p><b>L</b> 5 <b>N</b> 4 <b>D</b> 3</p> </div>	<div style="border: 1px solid black; padding: 5px;"> <p><b>D</b></p>  <p><b>A</b> 8 <b>D</b> 9 <b>R</b> 7</p> </div>	<div style="border: 1px solid black; padding: 5px;"> <p><b>E</b></p>  <p><b>I</b> 10 <b>M</b> 11 <b>S</b> 12</p> </div>	<div style="border: 1px solid black; padding: 5px;"> <p><b>F</b></p>  <p><b>L</b> 7 <b>T</b> 8 <b>A</b> 9</p> </div>
---	---	---	--	--	---

<b>A</b>	<b>B</b>	<b>C</b>	<b>D</b>	<b>E</b>	<b>F</b>
----------	----------	----------	----------	----------	----------

Lösungswort:

--	--	--	--	--	--

