



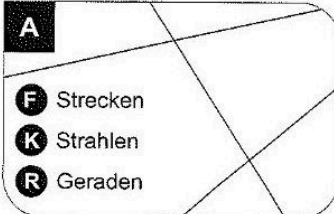
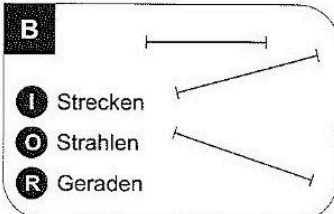
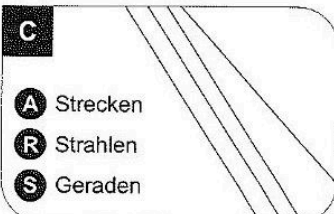
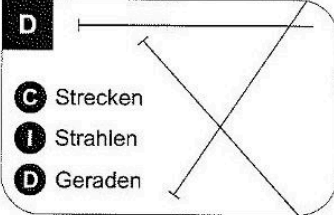
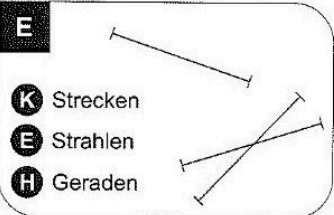
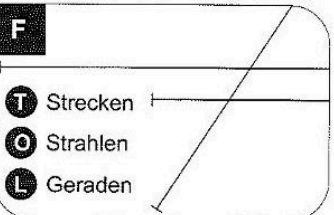


Station


Strecke, Strahl oder Gerade?

Kreuze an, ob es sich um Strecken, Strahlen oder Geraden handelt. Die Buchstaben bei den richtigen Lösungen ergeben ein Lösungswort.




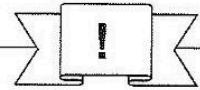
<div style="background-color: black; color: white; padding: 2px; text-align: center; font-weight: bold; margin-bottom: 5px;">A</div>  <div style="display: flex; flex-direction: column; gap: 5px;"> <div><input type="checkbox"/> F Strecken</div> <div><input type="checkbox"/> K Strahlen</div> <div><input type="checkbox"/> R Geraden</div> </div>	<div style="background-color: black; color: white; padding: 2px; text-align: center; font-weight: bold; margin-bottom: 5px;">B</div>  <div style="display: flex; flex-direction: column; gap: 5px;"> <div><input type="checkbox"/> I Strecken</div> <div><input type="checkbox"/> O Strahlen</div> <div><input type="checkbox"/> R Geraden</div> </div>	<div style="background-color: black; color: white; padding: 2px; text-align: center; font-weight: bold; margin-bottom: 5px;">C</div>  <div style="display: flex; flex-direction: column; gap: 5px;"> <div><input type="checkbox"/> A Strecken</div> <div><input type="checkbox"/> R Strahlen</div> <div><input type="checkbox"/> S Geraden</div> </div>
<div style="background-color: black; color: white; padding: 2px; text-align: center; font-weight: bold; margin-bottom: 5px;">D</div>  <div style="display: flex; flex-direction: column; gap: 5px;"> <div><input type="checkbox"/> C Strecken</div> <div><input type="checkbox"/> I Strahlen</div> <div><input type="checkbox"/> D Geraden</div> </div>	<div style="background-color: black; color: white; padding: 2px; text-align: center; font-weight: bold; margin-bottom: 5px;">E</div>  <div style="display: flex; flex-direction: column; gap: 5px;"> <div><input type="checkbox"/> K Strecken</div> <div><input type="checkbox"/> E Strahlen</div> <div><input type="checkbox"/> H Geraden</div> </div>	<div style="background-color: black; color: white; padding: 2px; text-align: center; font-weight: bold; margin-bottom: 5px;">F</div>  <div style="display: flex; flex-direction: column; gap: 5px;"> <div><input type="checkbox"/> T Strecken</div> <div><input type="checkbox"/> O Strahlen</div> <div><input type="checkbox"/> L Geraden</div> </div>

A	B	C	D	E	F

Lösungswort:

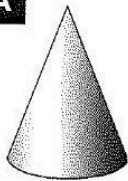

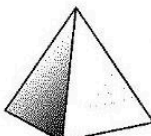
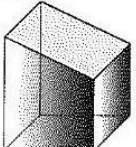
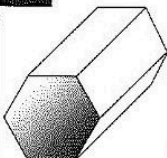
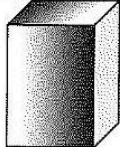


Station

Ecken geometrischer Körper

Bestimme die Anzahl der Ecken der abgebildeten Körper. Die Buchstaben der richtigen Lösungen ergeben das Lösungswort.

<div style="background-color: black; color: white; padding: 2px; text-align: center; font-weight: bold; margin-bottom: 5px;">A</div>  <div style="display: flex; flex-direction: column; gap: 5px;"> <div><input type="checkbox"/> L 2</div> <div><input type="checkbox"/> B 0</div> <div><input type="checkbox"/> P 1</div> </div>	<div style="background-color: black; color: white; padding: 2px; text-align: center; font-weight: bold; margin-bottom: 5px;">B</div>  <div style="display: flex; flex-direction: column; gap: 5px;"> <div><input type="checkbox"/> O 1</div> <div><input type="checkbox"/> A 0</div> <div><input type="checkbox"/> R 2</div> </div>	<div style="background-color: black; color: white; padding: 2px; text-align: center; font-weight: bold; margin-bottom: 5px;">C</div>  <div style="display: flex; flex-direction: column; gap: 5px;"> <div><input type="checkbox"/> L 5</div> <div><input type="checkbox"/> N 4</div> <div><input type="checkbox"/> D 3</div> </div>	<div style="background-color: black; color: white; padding: 2px; text-align: center; font-weight: bold; margin-bottom: 5px;">D</div>  <div style="display: flex; flex-direction: column; gap: 5px;"> <div><input type="checkbox"/> A 8</div> <div><input type="checkbox"/> D 9</div> <div><input type="checkbox"/> R 7</div> </div>	<div style="background-color: black; color: white; padding: 2px; text-align: center; font-weight: bold; margin-bottom: 5px;">E</div>  <div style="display: flex; flex-direction: column; gap: 5px;"> <div><input type="checkbox"/> I 10</div> <div><input type="checkbox"/> M 11</div> <div><input type="checkbox"/> S 12</div> </div>	<div style="background-color: black; color: white; padding: 2px; text-align: center; font-weight: bold; margin-bottom: 5px;">F</div>  <div style="display: flex; flex-direction: column; gap: 5px;"> <div><input type="checkbox"/> L 7</div> <div><input type="checkbox"/> T 8</div> <div><input type="checkbox"/> A 9</div> </div>
---	---	---	--	--	---

A	B	C	D	E	F

Lösungswort:

