






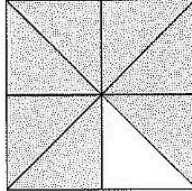
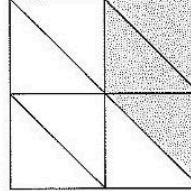
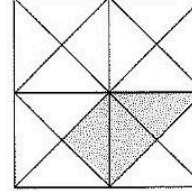
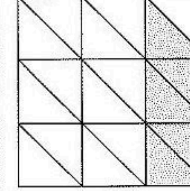
Station



Brüche erkennen

Welcher Bruchteil der Figur ist hier jeweils gekennzeichnet? Kreuze die passende Antwort an.
Aus den Kennbuchstaben der richtigen Lösungen ergibt sich ein Lösungswort.

A

K $\frac{3}{4}$

S $\frac{4}{5}$

H $\frac{9}{10}$

B

M $\frac{6}{7}$

A $\frac{7}{8}$

C $\frac{7}{10}$

C

H $\frac{3}{7}$

R $\frac{3}{8}$

T $\frac{3}{10}$

D

N $\frac{3}{9}$

L $\frac{3}{8}$

I $\frac{3}{16}$


E


N $\frac{5}{18}$

O $\frac{5}{17}$




U $\frac{5}{20}$


Lösungswort: **A B C D E**

 Stationenlernen Mathematik / 4. Schuljahr - Bestell-Nr. 11 398




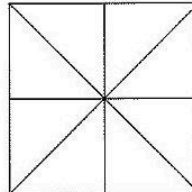
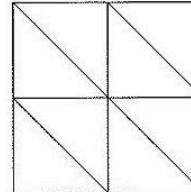
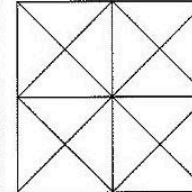
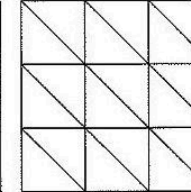
Station



Brüche färben

Färbe die angegebenen Brüche.


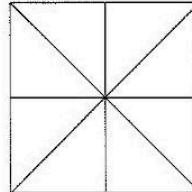
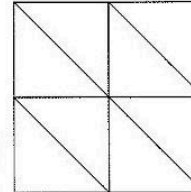
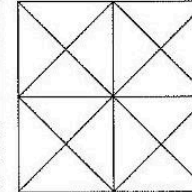
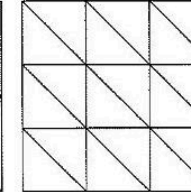
$\frac{3}{4}$

$\frac{1}{2}$

$\frac{5}{8}$

$\frac{11}{16}$

$\frac{1}{3}$

$\frac{2}{5}$

$\frac{7}{8}$

$\frac{1}{4}$

$\frac{9}{16}$

$\frac{7}{18}$

Mathematik

Seite 1/2

Angaben zu den Urhebern und Lizenzbedingungen der einzelnen Bestandteile dieses Dokuments finden Sie unter <https://www.tutory.de/entdecken/dokument/stationenlernen-mathematik-4-xxiii>

