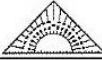






Station

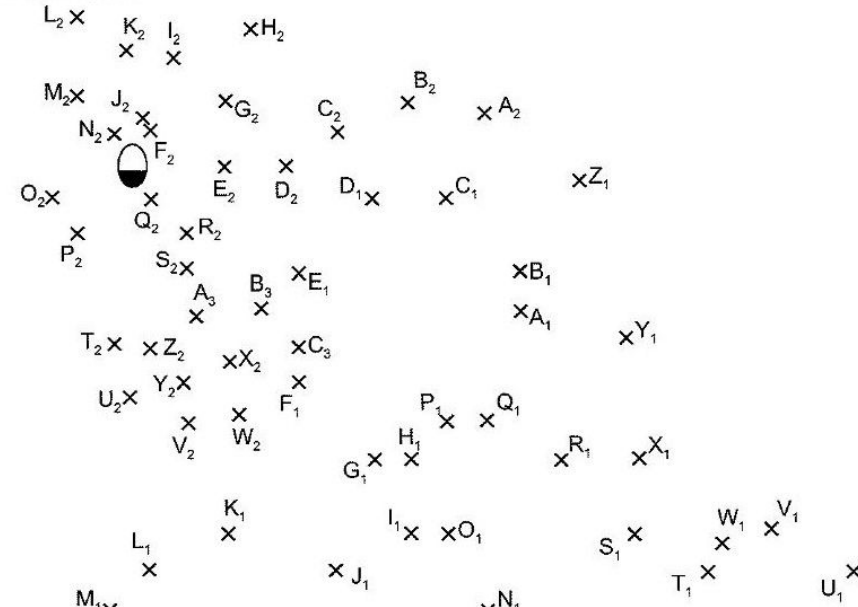








Zeichnen von Strecken




Zeichne die folgenden Strecken:


$\overline{A_1B_1}$	$\overline{B_1C_1}$	$\overline{C_1D_1}$	$\overline{D_1E_1}$
$\overline{E_1F_1}$	$\overline{F_1G_1}$	$\overline{G_1H_1}$	$\overline{H_1I_1}$
$\overline{I_1J_1}$	$\overline{J_1K_1}$	$\overline{K_1L_1}$	$\overline{L_1M_1}$
$\overline{M_1N_1}$	$\overline{N_1O_1}$	$\overline{O_1P_1}$	$\overline{P_1Q_1}$
$\overline{Q_1R_1}$	$\overline{R_1S_1}$	$\overline{S_1T_1}$	$\overline{T_1U_1}$
$\overline{U_1V_1}$	$\overline{V_1W_1}$	$\overline{W_1X_1}$	$\overline{X_1Y_1}$
$\overline{Y_1Z_1}$	$\overline{Z_1A_2}$	$\overline{A_2B_2}$	$\overline{B_2C_2}$
$\overline{C_2D_2}$	$\overline{D_2E_2}$	$\overline{E_2F_2}$	$\overline{F_2G_2}$
$\overline{G_2H_2}$	$\overline{H_2I_2}$	$\overline{I_2J_2}$	$\overline{J_2K_2}$
$\overline{K_2L_2}$	$\overline{L_2M_2}$	$\overline{M_2N_2}$	$\overline{N_2O_2}$
$\overline{O_2P_2}$	$\overline{P_2Q_2}$	$\overline{Q_2R_2}$	$\overline{R_2S_2}$
$\overline{S_2T_2}$	$\overline{T_2U_2}$	$\overline{U_2V_2}$	$\overline{V_2W_2}$
$\overline{W_2X_2}$	$\overline{X_2Y_2}$	$\overline{Y_2Z_2}$	$\overline{Z_2A_3}$
$\overline{A_3B_3}$	$\overline{B_3C_3}$		





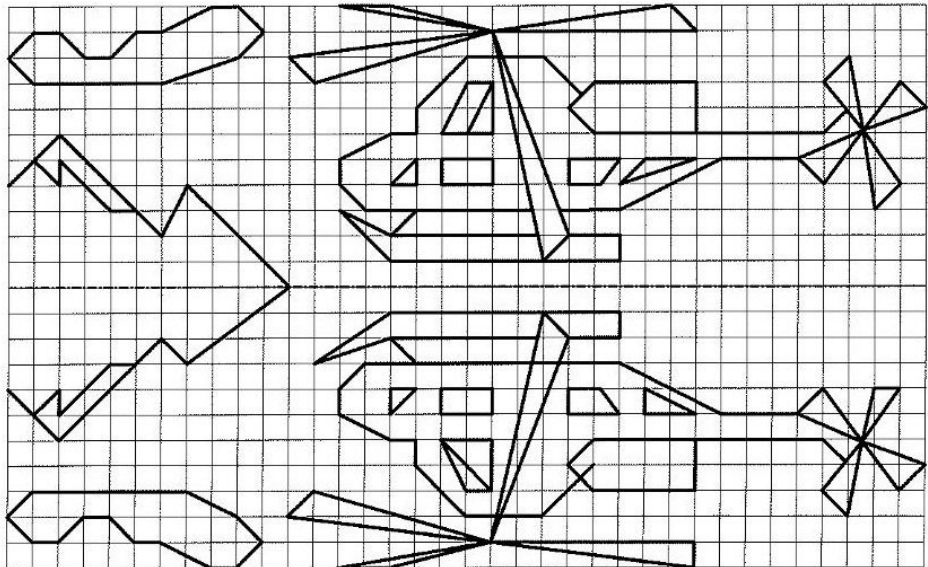
Station









Spiegeln im Gitternetz


Im unteren Spiegelbild haben sich 10 Fehler eingeschlichen. Findet ihr sie alle?





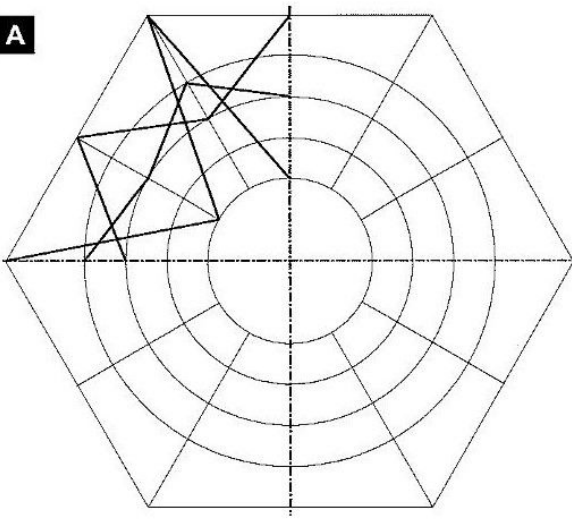
Station



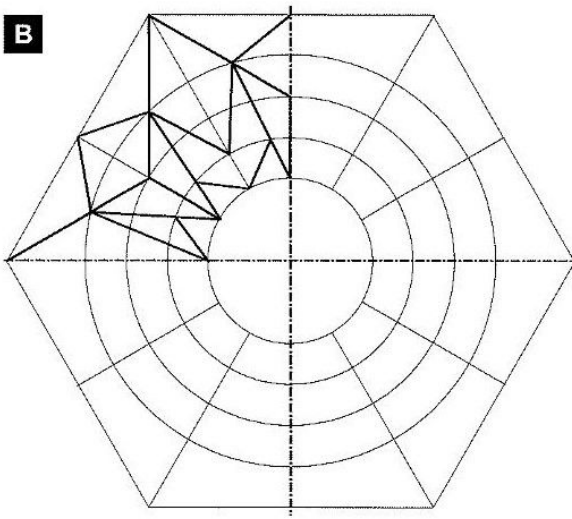



Spiegeln
Spiegelt die vorgegebenen Figuren an den eingezeichneten Achsen. Ihr könnt eure Bilder farbig anlegen.

A





B





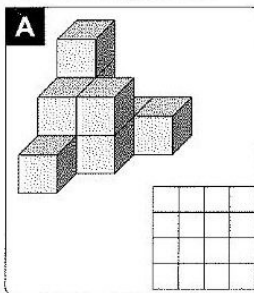
Station



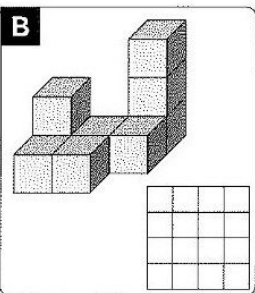


Würfelbauten mit Bauplänen
Fülle die Baupläne aus.

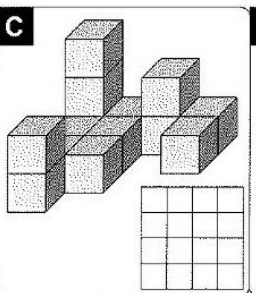
A



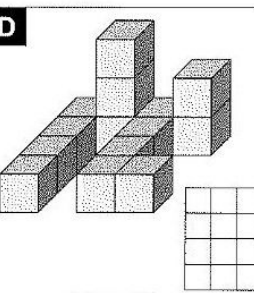
B



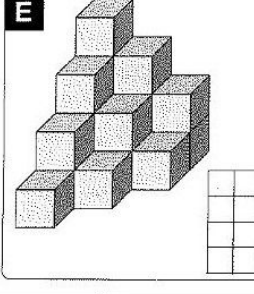
C



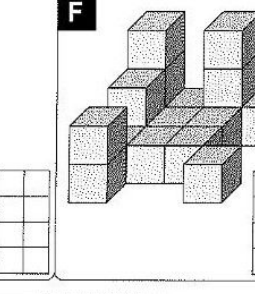
D



E



F



G

