
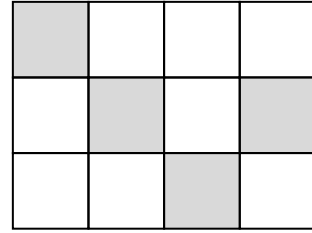
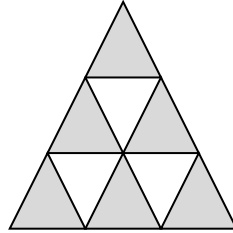
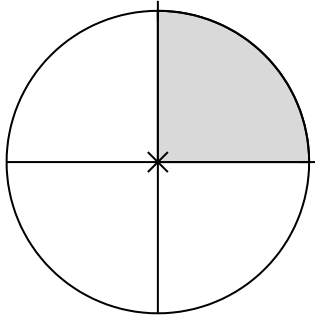


① Schreibe als Dezimalzahl und wandle in Prozent um.

/ 6



② Schreibe als Prozent bzw. als Dezimalzahl.

/ 4

a) $0,445 =$

c) $0,08 =$

b) $32\% =$

d) $7,5\% =$

③ Berechne die fehlenden Werte

/ 18

1.	a)	b)	c)
G	900	<input type="text"/>	600
p	35%	25%	<input type="text"/>
W	<input type="text"/>	125	60

2.	a)	b)	c)
K	600 €	<input type="text"/>	400
p	4%	2,5%	<input type="text"/>
Z	<input type="text"/>	25,5	20
t	3 m	10 d	1 y

