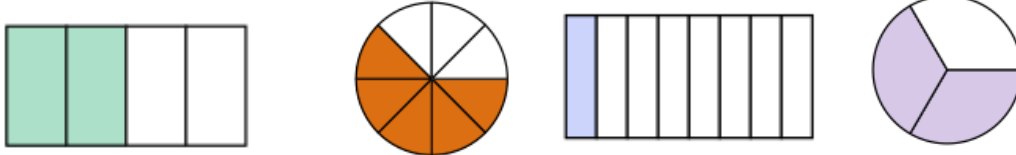


① Gib die grau gefärbten Teile als Bruch an.

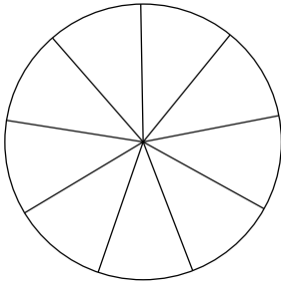
/ 4



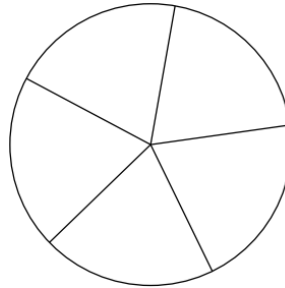
--	--	--	--

② Färbe die Flächen entsprechend des Bruches.

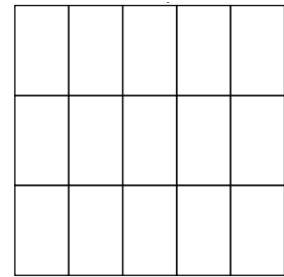
/ 5



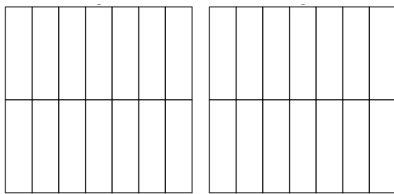
$\frac{2}{9}$



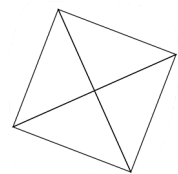
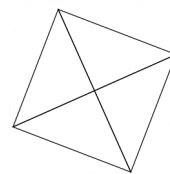
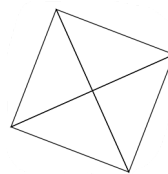
$\frac{4}{5}$



$\frac{10}{15}$



$\frac{20}{14}$



$2\frac{1}{4}$

③ Gib die markierten Brüche an.

/ 4

