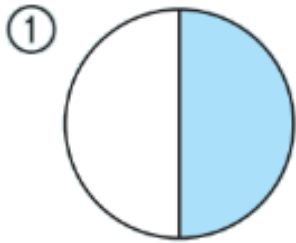
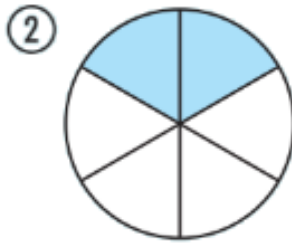


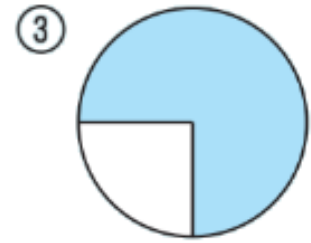
① Gib den Anteil der gefärbten Fläche als Bruch und in Prozent an.



=



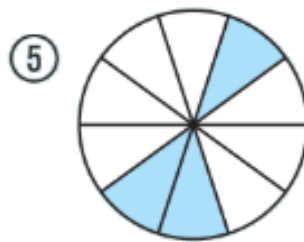
=



=



=



=



=

Nr.	Bruch	Dezimalbruch	Prozent
a)	$\frac{7}{50}$	<input type="text"/>	<input type="text"/>
b)	$\frac{3}{10}$	<input type="text"/>	<input type="text"/>
c)	<input type="text"/>	0,25	<input type="text"/>
d)	<input type="text"/>	0,07	<input type="text"/>
e)	<input type="text"/>	<input type="text"/>	12%
f)	<input type="text"/>	<input type="text"/>	120%