


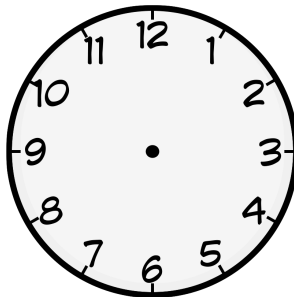
la hora

1 Dibuja las manitas de los relojes según la hora indicada.

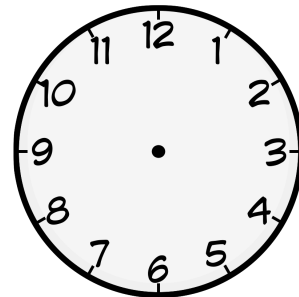
pEs la una y cuarto./p




pSon las cuatro en punto./p



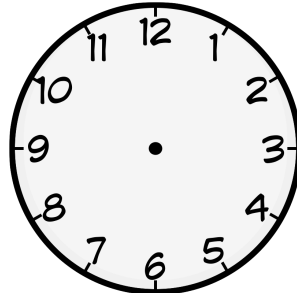
pSon las dos y media./p



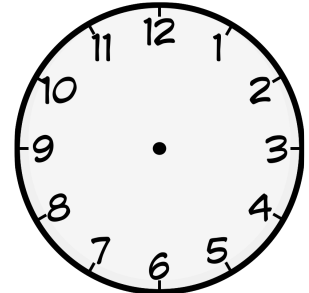
pSon las ocho menos diez./p



pSon las diez menos veinte./p



pSon las doce menos cuarto./p



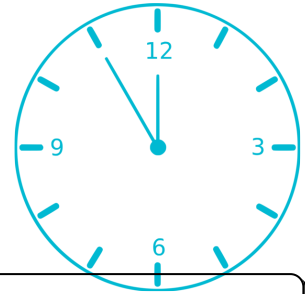
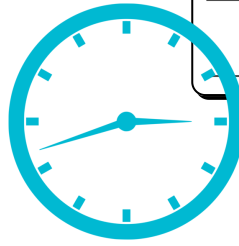
2 Apunta la hora correcta de los relojes.



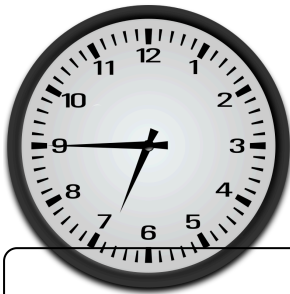


Blank writing box with three horizontal lines.

Blank writing box with three horizontal lines.



Blank writing box with three horizontal lines.




Blank writing box with three horizontal lines.




Blank writing box with three horizontal lines.



Blank writing box with three horizontal lines.



Blank writing box with three horizontal lines.



Blank writing box with three horizontal lines.