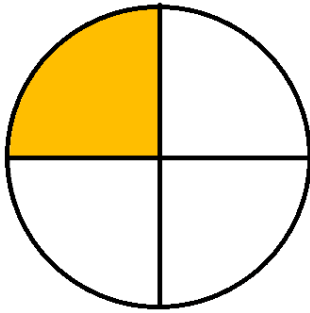
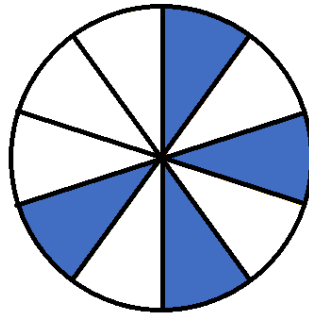


① Gib den gefärbten Anteil als Bruch und als Prozentsatz an.

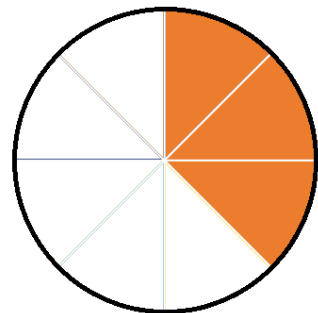
1 / 6



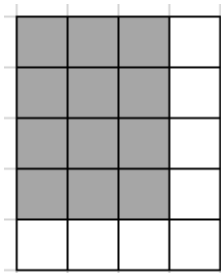
=  %



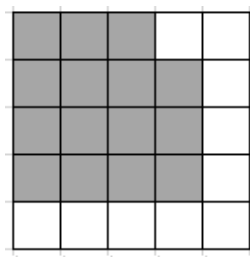
=  %



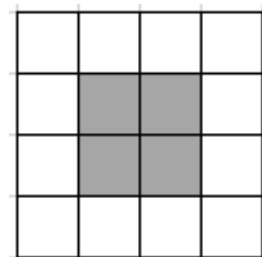
=  %



=  %



=  %



=  %

② Berechne die fehlenden Werte

1 / 4½

Prozentsatz	<input type="text"/> %	5%	<input type="text"/> %	18%
Dezimalzahl	<input type="text"/>	<input type="text"/>	0,3	0,18
Bruch	$\frac{12}{100}$	<input type="text"/>	<input type="text"/>	<input type="text"/>



