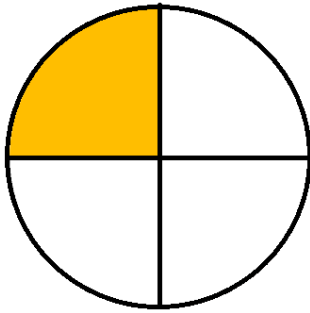
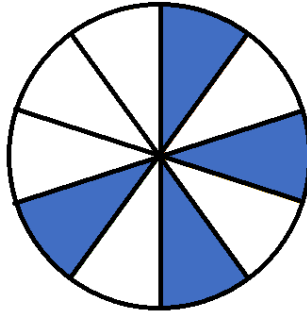


① Gib den gefärbten Anteil als Bruch und als Prozentsatz an.

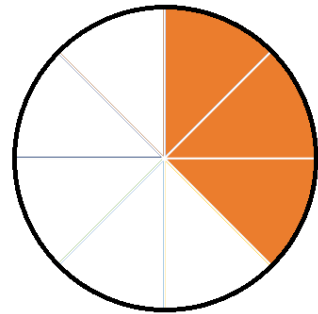
1 / 6



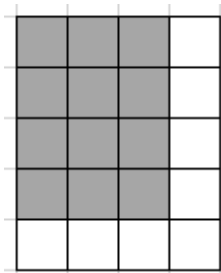
=  %




=  %



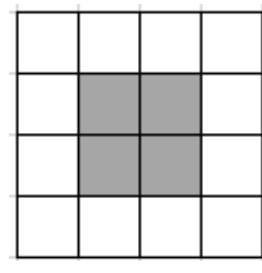
=  %



=  %



=  %



=  %

② Berechne die fehlenden Werte

1 / 4½

|             |                        |                      |                        |                      |
|-------------|------------------------|----------------------|------------------------|----------------------|
| Prozentsatz | <input type="text"/> % | 5%                   | <input type="text"/> % | 18%                  |
| Dezimalzahl | <input type="text"/>   | <input type="text"/> | 0,3                    | <input type="text"/> |
| Bruch       | $\frac{12}{100}$       | <input type="text"/> | <input type="text"/>   | <input type="text"/> |





