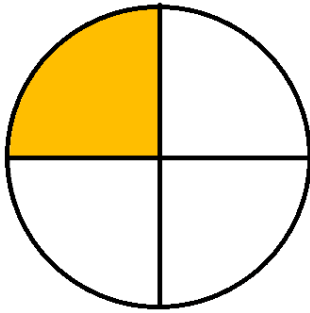
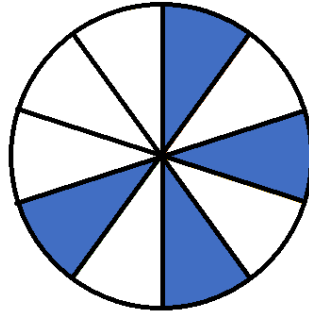


① Gib den gefärbten Anteil als Bruch und als Prozentsatz an.

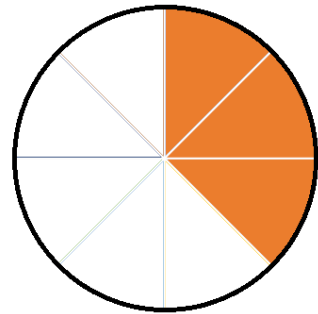
1 / 6



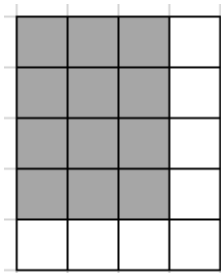
= %




= %



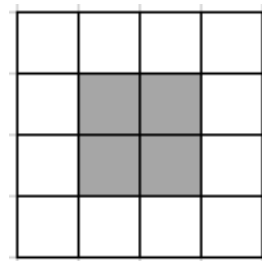
= %



= %



= %



= %

② Berechne die fehlenden Werte

1 / 4½

| | | | | |
|-------------|------------------------|----------------------|------------------------|----------------------|
| Prozentsatz | <input type="text"/> % | 5% | <input type="text"/> % | 18% |
| Dezimalzahl | <input type="text"/> | <input type="text"/> | 0,3 | 0,18 |
| Bruch | $\frac{12}{100}$ | <input type="text"/> | <input type="text"/> | <input type="text"/> |

