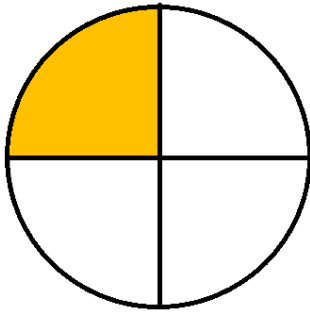
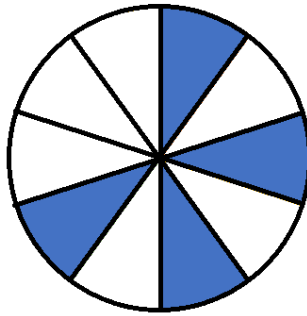


① Gib den gefärbten Anteil als Bruch und als Prozentsatz an.

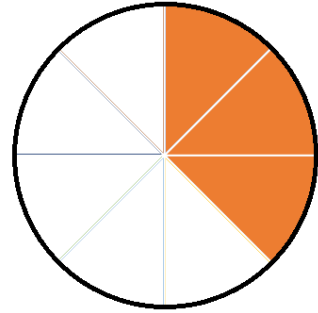
1 / 6



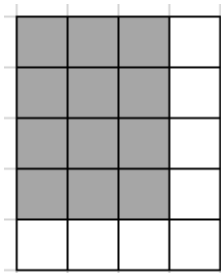
= %




= %



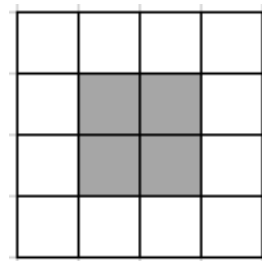
= %



= %



= %



= %

② Berechne die fehlenden Werte

1 / 4½

Prozentsatz	<input type="text"/> %	5%	<input type="text"/> %	<input type="text"/> %
Dezimalzahl	<input type="text"/>	<input type="text"/>	0,3	<input type="text"/>
Bruch	$\frac{12}{100}$	<input type="text"/>	<input type="text"/>	<input type="text"/>

