

Die Gefäße werden mit gleichmäßig fließendem Wasser gefüllt.

① Ordne jedem Gefäß eine Skizze des Füllgraphen zu.

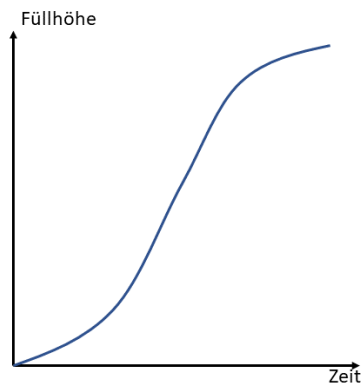
A ●    ○ 2

B ●    ○ 3

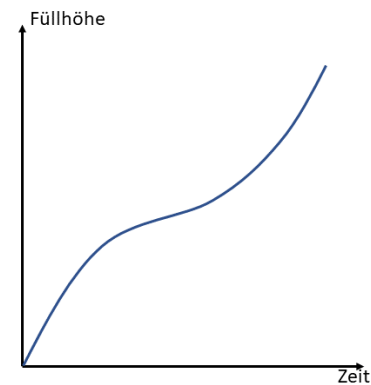
C ●    ○ 1

D ●    ○ 5

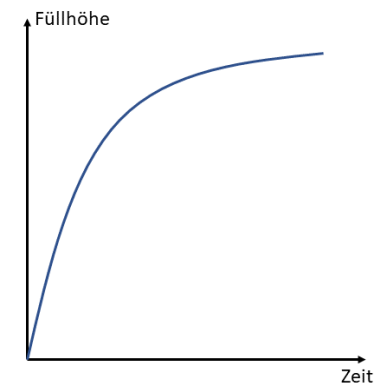
E ●    ○ 4



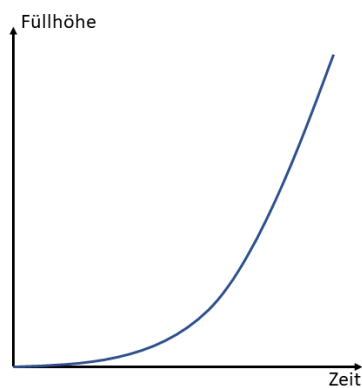
1



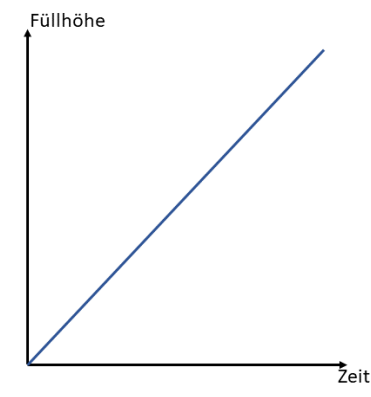
2



3



5



4