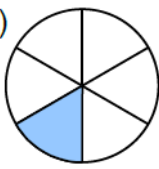
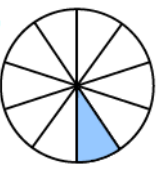

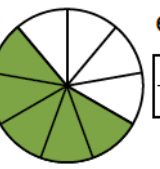


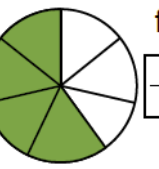
① Welcher Bruchteil ist gefärbt? Schreibe das Ergebnis als Bruch wie im Beispiel a).


a)    $\frac{1}{6}$


b) 


c) 

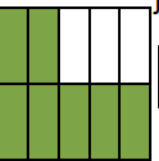
d) 

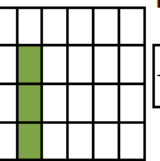
e) 

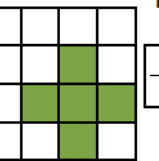
f) 

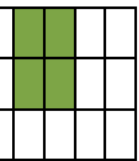
g) 

h) 

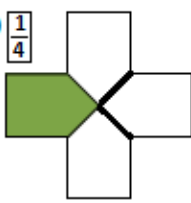
i) 

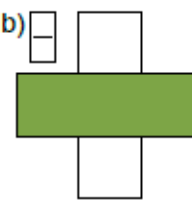
j) 

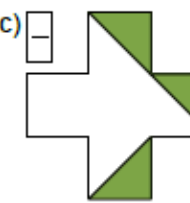
k) 

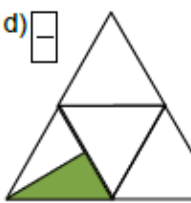
l) 

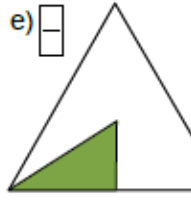
② Unterteile die Figur in gleich große Bereiche und bestimme den Bruch, den der gefärbte Anteil darstellt.

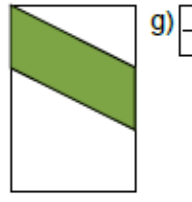
a)    $\frac{1}{4}$

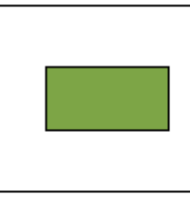
b) 


c) 

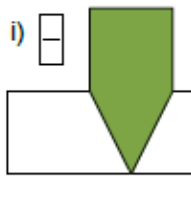
d) 

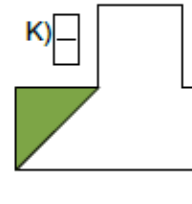
e) 

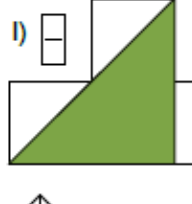
f) 

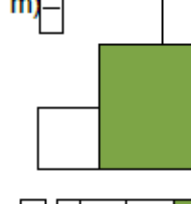
g) 

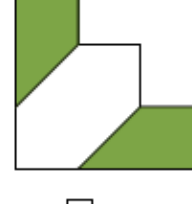
h) 

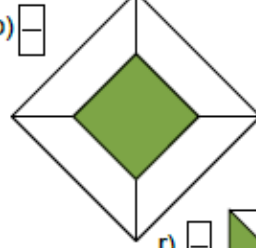
i) 

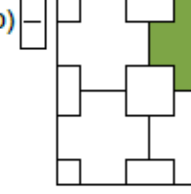
k) 

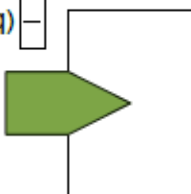
l) 

m) 

n) 

o) 

p) 

q) 

r) 