

Thema 1: Addition

① Addiere und fülle die Lücken passend aus.

a) $9958 + 20 =$

$9958 + 12 =$

$99991 + 130 =$

b) $27 + \square = 98$

$\square + 33 = 149$

② Rechne vorteilhaft

a) $75 + 41 + 35 =$

$370 + 165 + 230 =$

$27 + 59 + 13 =$

b) $28 + 94 + 12 =$

$427 + 473 + 73 =$

$75 + 43 + 25 + 47 =$


③ Addiere schriftlich.

a) $647 + 182$


b) $7612 + 3458$

$2104 + 4739 +$

c) $519 =$



④ Fülle die Rechenmauern passend aus.



Thema 2: Subtraktion

⑤ Subtrahiere und fülle die Lücken passend aus.

a) $10005 - 25 =$
 $10005 - 250 =$
 $100004 - 19 =$

b) $170 - \square = 59$
 $1001 - \square = 81$
 $\square - 468 = 101$


⑥ Berechne. Achte auf die Klammern.

a) $66 - (11 + 33) =$
 $107 + 37 - (35 + 66) =$
 $506 - (308 + 68) =$

b) $(1000 - 599) =$
 $395 - (36 - 12) =$

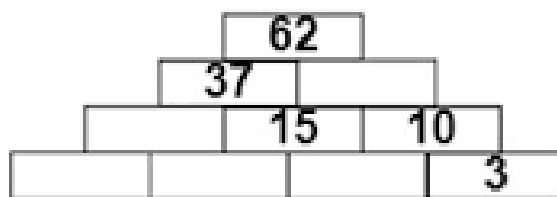
⑦ Subtrahiere schriftlich.

a) $874 - 436 =$ b) $69 - 17 - 23 =$ c) $9422 - 4685 =$



⑧ Vervollständige die Zahlenmauer.

a)



b)

