

**Thema 1: Addition**

① Addiere und fülle die Lücken passend aus.

a)  $9958 + 20 =$

$9958 + 12 =$

$99991 + 130 =$

b)  $27 + \square = 98$

$\square + 33 = 149$

② Rechne vorteilhaft

a)  $75 + 41 + 35 =$

$370 + 165 + 230 =$

$27 + 59 + 13 =$

b)  $28 + 94 + 12 =$

$427 + 473 + 73 =$

$75 + 43 + 25 + 47 =$


③ Addiere schriftlich.

a)  $647 + 182$


b)  $7612 + 3458$

$2104 + 4739 +$

c)  $519 =$



④ Fülle die Rechenmauern passend aus.





**Thema 3: Multiplikation**

⑨ Berechne im Kopf.

a)  $5 \cdot 9 \cdot 2 =$

b)  $7 \cdot 4 \cdot 25 =$

c)  $21 \cdot 13 =$


⑩ Multipliziere schriftlich.

a)  $32 \cdot 4 =$

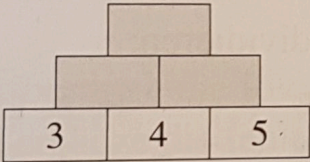
b)  $56 \cdot 800 =$

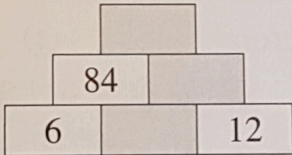
c)  $5206 \cdot 5 =$

d)  $125 \cdot 23 =$



⑪ Fülle die Multiplikationsmauern aus.

a) 

b) 

c) 