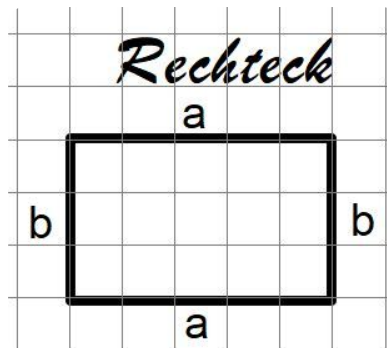
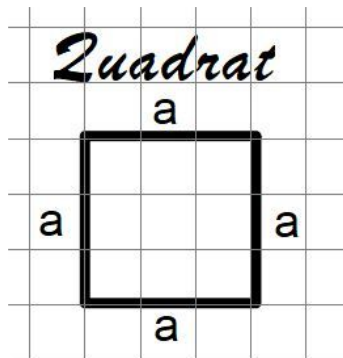
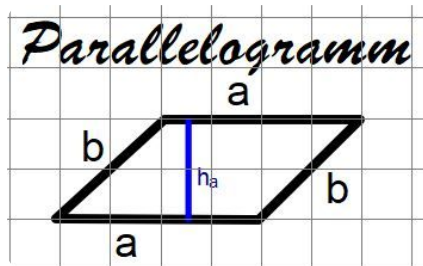


Umfang $U_R =$ 

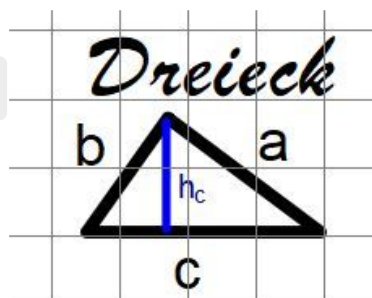
Bildquelle: sal

 $U_{Qu} =$ 

Bildquelle: sal

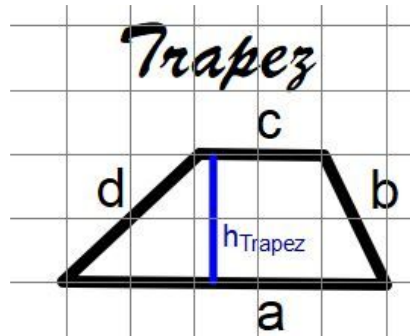
 $U_P =$ 

Bildquelle: sal

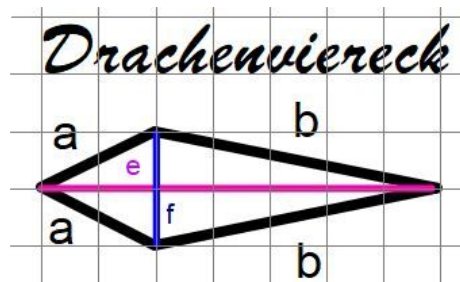
 $U_{Dr} =$ 

Bildquelle: sal

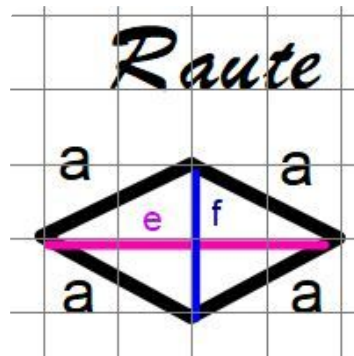
Flächeninhalt $A_R =$ $A_{Qu} =$ $A_P =$ $A_{Dr} =$

Umfang $U_{Tr} =$ 

Bildquelle: sal

Flächeninhalt $A_{Tr} =$ $U_D =$ 

Bildquelle: sal

 $A_D =$ $U_{Rau} =$ 

Bildquelle: sal

 $A_{Rau} =$ realmath-Aufgaben:<https://bit.ly/2C8aYgE><https://bit.ly/2TlcNlc>

**Übungs-
aufgaben**
zur Berech-
nung ebe-
ner Figuren

quizizz:<https://bit.ly/2XLj489>