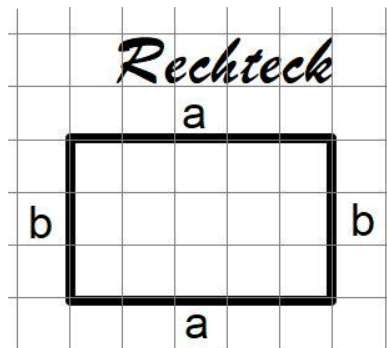


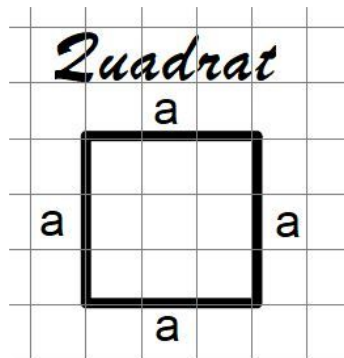
Umfang

$U_R =$



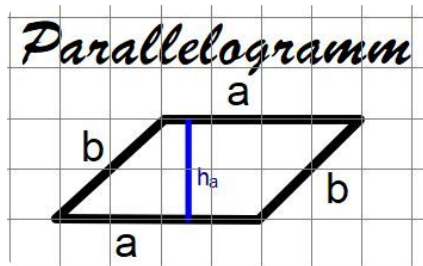
Bildquelle: sal

$U_{Qu} =$



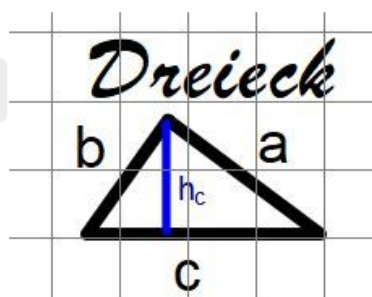
Bildquelle: sal

$U_P =$



Bildquelle: sal

$U_{Dr} =$



Bildquelle: sal

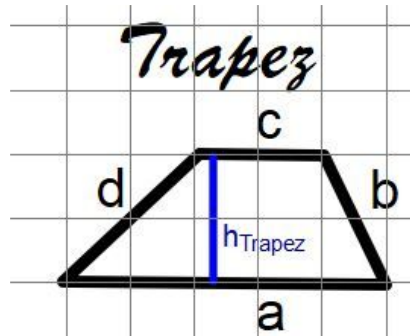
Flächeninhalt

$A_R =$

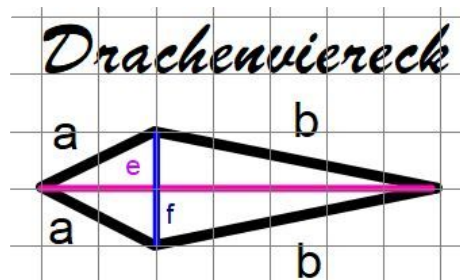
$A_{Qu} =$

$A_P =$

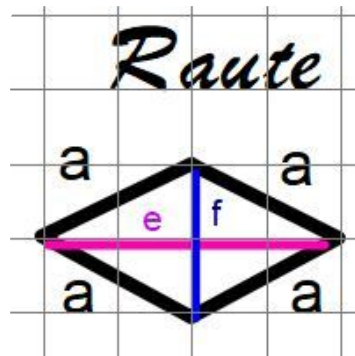
$A_{Dr} =$

Umfang $U_{Tr} =$ 

Bildquelle: sal

Flächeninhalt $A_{Tr} =$ $U_D =$ 

Bildquelle: sal

 $A_D =$ $U_{Rau} =$ 

Bildquelle: sal

 $A_{Rau} =$ realmath-Aufgaben:<https://bit.ly/2C8aYgE><https://bit.ly/2TlcNlc>

Übungs-
aufgaben
zur Berech-
nung ebe-
ner Figuren

quizizz:<https://bit.ly/2XLj489>